















	MY PREDICTION ONLY BY ESTIMATE	WHAT I CHECK USING MY HANDS	I CHECK WITH THE SCALE
	<u>WHICH WEIGHS THE MOST AND LEAST</u>	<u>WHICH WEIGHS THE MOST AND LEAST</u>	<u>WHICH WEIGHS THE MOST AND LEAST</u>
 Apple  Pear	The one weighs more is _____ The one that weighs less is _____	The one weighs more is _____ The one that weighs less is _____	The one weighs more is _____ The one that weighs less is _____
 Orange  Apple	The one weighs more is _____ The one that weighs less is _____	The one weighs more is _____ The one that weighs less is _____	The one weighs more is _____ The one that weighs less is _____
 Banana  Pear	The one weighs more is _____ The one that weighs less is _____	The one weighs more is _____ The one that weighs less is _____	The one weighs more is _____ The one that weighs less is _____
 Apple  Banana	The one weighs more is _____ The one that weighs less is _____	The one weighs more is _____ The one that weighs less is _____	The one weighs more is _____ The one that weighs less is _____
 Orange  Pear	The one weighs more is _____ The one that weighs less is _____	The one weighs more is _____ The one that weighs less is _____	The one weighs more is _____ The one that weighs less is _____
 Orange  Banana	The one weighs more is _____ The one that weighs less is _____	The one weighs more is _____ The one that weighs less is _____	The one weighs more is _____ The one that weighs less is _____
 Bread  Fig	The one weighs more is _____ The one that weighs less is _____	The one weighs more is _____ The one that weighs less is _____	The one weighs more is _____ The one that weighs less is _____

